

SOCIAL STUDIES, Paper - II

(English version)

Parts A and B

Time : 2 hrs. 45 min.]

[Maximum Marks : 40

Instructions :

- (1) 15 minutes is allocated to read the question paper and 2.30 hours is allocated to write answers.
 - (2) Answer the questions under **Part 'A'** on a separate sheet.
 - (3) Write the answers to the questions under **Part 'B'** on the question paper itself and attach it to the answer book of **Part 'A'**.
 - (4) Attach the given outline map of **World** with the answer book of **Part 'A'**.
-

Part - A

Time : 2.00 hrs.

Marks : 30

SECTION - I

4×1=4

NOTE : (i) Answer **all** the following questions.

(ii) Each question carries **ONE** mark.

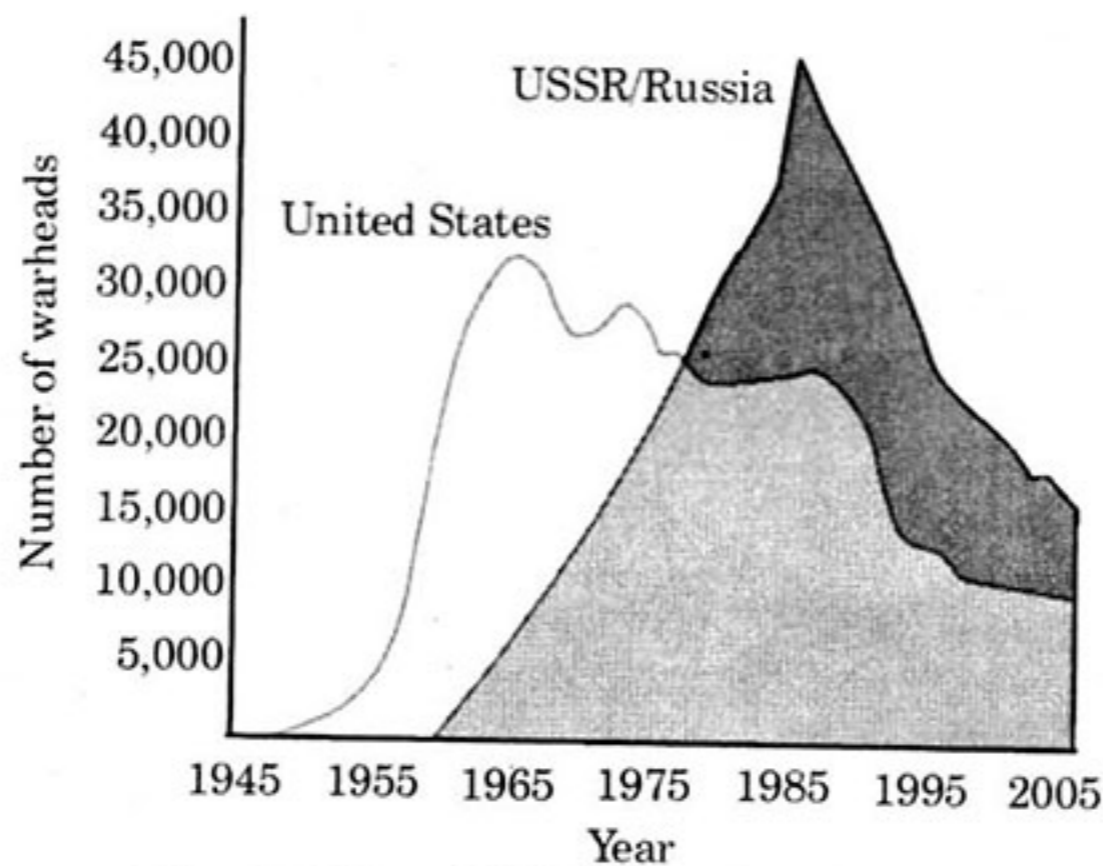
1. What were the main challenges before the leaders of the country in early years after Independence ?
2. Write any two objectives of U.N.O.
3. Write down the ill effects of reckless oil extraction in Nigeria.
4. Write two slogans on the necessity of peace.

SECTION - II

5×2=10

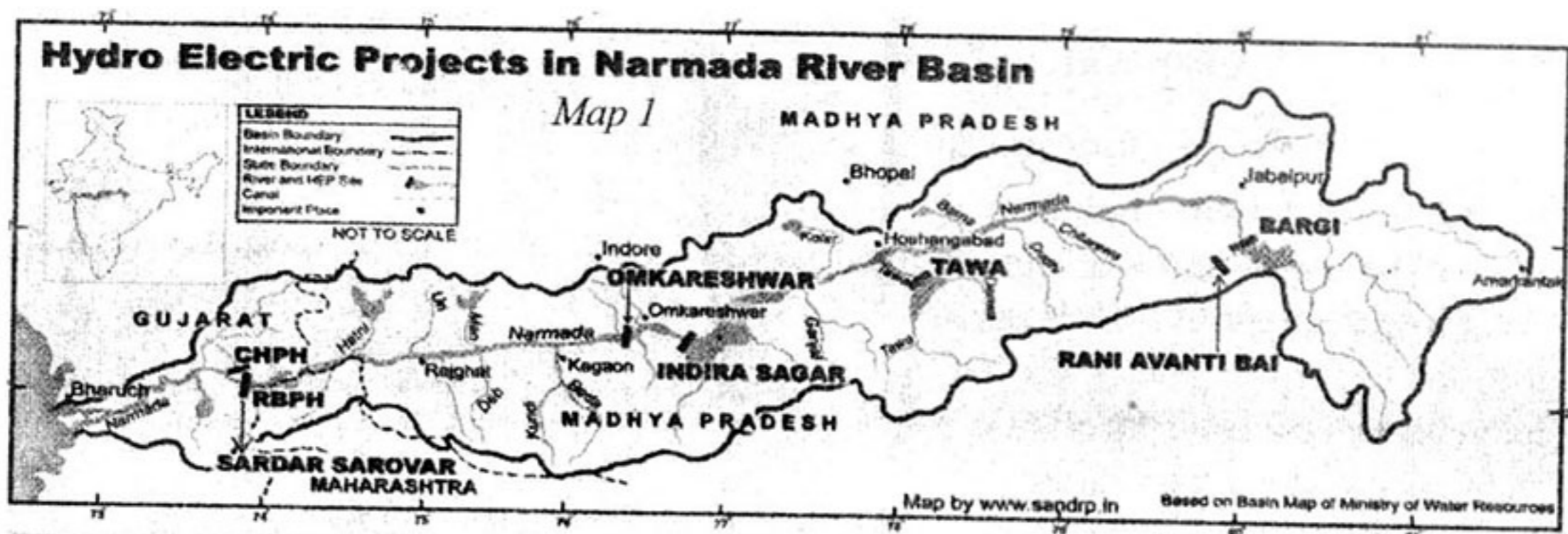
NOTE : (i) Answer **all** the following questions.
(ii) Each question carries **TWO** marks.

5. "Constitution is a living and changing document." Would you agree with it? Justify it.
6. How did the education system in Vietnam contribute to the emergence of nationalist ideas?
7. Analyse the below graph and write your observations.



Graph: US and USSR nuclear stockpiles

8. Read the map given below and answer the following questions.



- (i) In which state, was Sardar Sarovar Project constructed?
- (ii) Name the movement that was held against the construction of dams on river Narmada.

9. "Coalition Governments cause political instability." Comment.

SECTION - III

4×4=16

- NOTE :** (i) Answer **all** the following questions.
(ii) Each question carries **FOUR** marks.

10. (A) "Right to Information Act resembles the true spirit of Democracy". Explain.

OR

- (B) What steps both India and China should take to build lasting peace between the two countries ?

11. (A) Explain the rise of Nazism in Germany.

OR

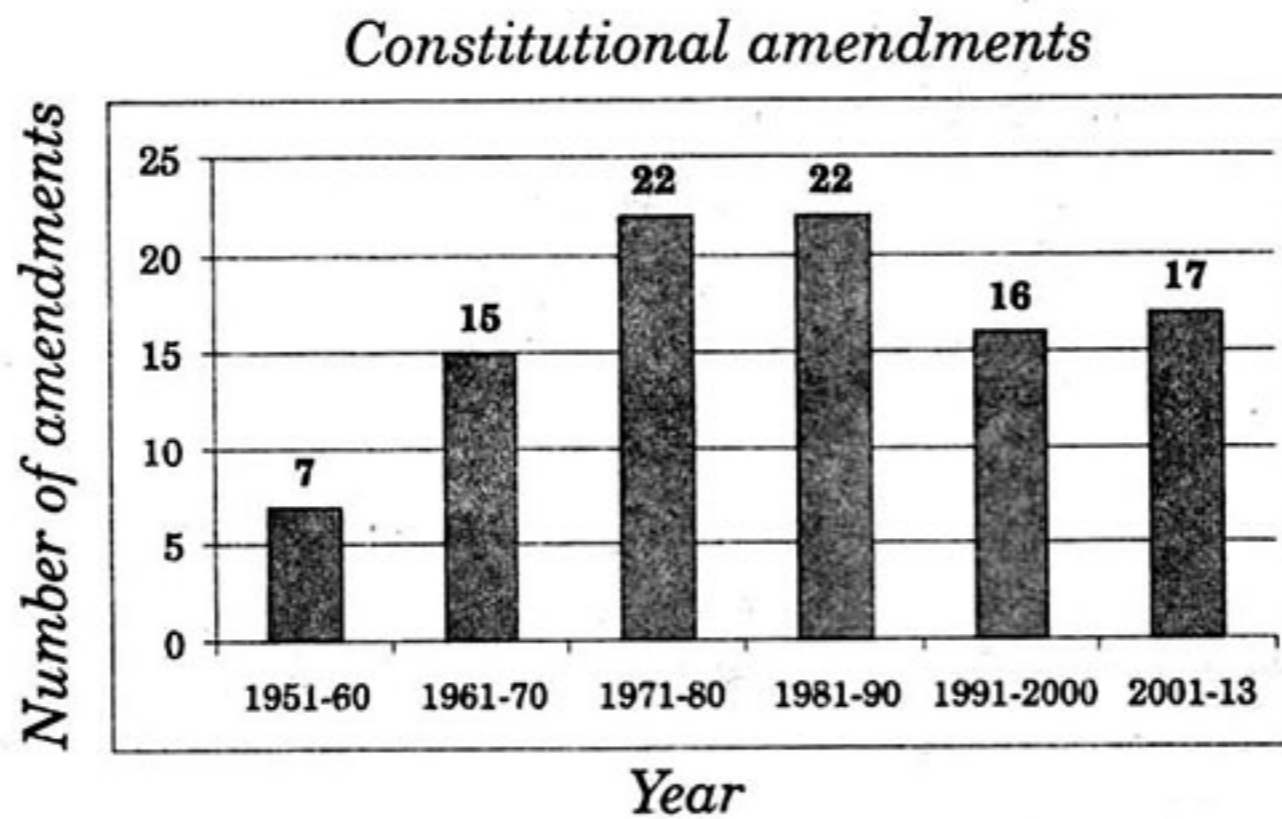
- (B) Estimate the pros and cons of building Multipurpose projects.

12. (A) Answer the questions with the help of Time-line chart.

- (a) What was the immediate cause for the Second World war ?
- (b) When did the United States enter into the World war II ?
- (c) The Weimar Republic belongs to which country ?
- (d) Write any two important incidents occurred in 1941.

Proclamation of the Weimar Republic	• Nov. 9, 1918
Hitler becomes chancellor of Germany.	• January 30, 1933
Germany invades Poland. Beginning of the Second World War.	• Sep. 1, 1939
Germany invades the USSR.	• June 22, 1941
Mass murder of the Jews begins.	• June 23, 1941
The United States joins Second World War.	• Dec 8, 1941
Soviet troops liberate Auschwitz	• Jan 27, 1945
Allied victory in Europe.	• May 8, 1945

OR

OR**(B)** Answer the following questions based on the below graph.

- (a) When did the Constitution come into force ?
- (b) In which decade, the least number of amendments had done ?
- (c) Why does the Constitution need to be amended ?
- (d) How many Constitutional amendments had been done from 1951 to 1980 ?

13. Point out the following in a given map of **World**.

- (A)** (a) The city in which the head-quarters of International Court of Justice is situated.
- (b) The capital city of England.
- (c) The country that was called as Dutch East Indies.
- (d) The country of Danzing port.

OR

- (B)** (1) Beijing
- (2) North Korea
- (3) Italy
- (4) Alaska

22E(B)

SOCIAL STUDIES, Paper - II

(English version)

Parts A and B

Time : 2 hrs. 45 min.]

[Maximum Marks : 40

Instruction : Write the answers to the questions in this **Part-B** on the Question paper itself and attach it to the answer book of **Part-A**.

Part - B

Time : 30 minutes

Marks : 10

SECTION - IV

NOTE :

1. Write the **CAPITAL LETTERS** (A, B, C, D) showing the correct answer for the following questions in the brackets provided against each question.
2. Each question carries $\frac{1}{2}$ mark.
3. Answer **all** the questions.
4. Answers are to be written in the question paper only.
5. Marks will **not** be awarded in any case of over-writing, rewritten or erased answers.

14. The Indian who played an important role in comintern, an international organisation setup to promote communist revolution in the World. []
(A) Jawaharlal Nehru. (B) Bhagat Singh.
(C) M.N. Roy. (D) Shaukat Usmani.

15. Which of the following is incorrect ? []
(A) The German Parliament - Reichstag.
(B) German Secret Police - Gestapo.
(C) Auschwitz - Concentration camp.
(D) Socialism - Adolf Hitler.

16. Which of the following is correct ? []
 (A) Northern Nigeria is dominated by Igbo tribes.
 (B) The South Eastern Nigeria is dominated by Yoruba.
 (C) The South Western Nigeria is dominated by Hausa - Fulani.
 (D) Northern Nigeria is dominated by Hausa - Fulani.
17. Why did the United States decide to intervene the Vietnam war ? []
 (A) Because it felt that Communists would gain power in Vietnam.
 (B) Because Vietnam attacked United States.
 (C) Because France became the trading partner of US.
 (D) Because Britain helped Vietnam.
18. The main aim of 'Zionist movement' is to []
 (A) form a separate country to Arabs.
 (B) to get share in oil wells.
 (C) form a separate country to Jews.
 (D) spread Christianity throughout the world.
19. The following provision is provided by the Constitution of India for social engineering. []
 (A) Reservations.
 (B) Special protection to minorities.
 (C) Abolition of untouchability.
 (D) All the above.
20. Which preamble of the Constitution refers to the word 'Gender' ? []
 (A) India (B) Japan
 (C) Nepal (D) South Africa
21. Which of the languages are ignored at the time of State reorganisation ? []
 (A) Gondi (B) Santhali
 (C) Oraon (D) All of the above.

22. Name the agreement signed between India and China. []
(A) Simla agreement. (B) Panchasheela pact.
(C) Siachen pact. (D) Tashkent agreement.
23. Nigeria was the colony of []
(A) Portugal. (B) France.
(C) Belgium. (D) England.
24. Meira Paibi movement was held against []
(A) Alcohol abuse in public.
(B) The violation of human rights in Tripura.
(C) The use of chemical fertilizers.
(D) The construction of multipurpose projects.
25. Which of the following basic elements are present in Social movements ? []
(A) Justice. (B) Human Rights.
(C) Democracy. (D) All the above.
26. The purpose of 'New Deal' was []
(A) to help the victims of economic depression.
(B) to help the victims of world wars.
(C) to help the Jews.
(D) to help the Soldiers.
27. The official language of India is []
(A) Telugu (B) Hindi
(C) English (D) Urdu
28. This is the benefit of Lok Adalat []
(A) It gives better access for general public to the Judiciary system.
(B) It involves less time and less expenditure.
(C) Free legal service.
(D) All the above.

29. This is not an objective of N.A.M. []
- (A) Getting benefitted by joining in a powerful block.
 - (B) Cooperation among the member countries.
 - (C) Decreasing cold war tense.
 - (D) Maintaining equal distance between the super powers.
30. The organisation which was established for world peace after the First World War was []
- (A) United Nations Organisation.
 - (B) Non-Align movement.
 - (C) League of Nations.
 - (D) Comintern.
31. The policy implemented by U.S.S.R. was []
- (i) Rapid industrialisation.
 - (ii) Collectivisation of agriculture.
- (A) (i) only.
 - (B) (ii) only.
 - (C) Both (i) and (ii).
 - (D) None of the two.
32. The great work of Sardar Vallabh bhai Patel was []
- (A) Merging of princely states in the Indian Union.
 - (B) Initiating Quit India Movement.
 - (C) Leadership of Home rule movement.
 - (D) Declaration of Indian independence.
33. Which among the following is related to Rajiv Gandhi ? []
- (A) Initiation of Telecom revolution in India.
 - (B) Encouragement of Science and Technology.
 - (C) Both A and B.
 - (D) Imposing emergency.